




Use the number line to solve each problem.

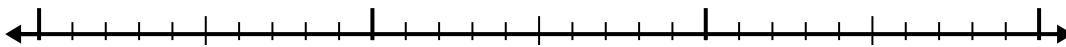
Answers

1) $12 - 3.4 =$



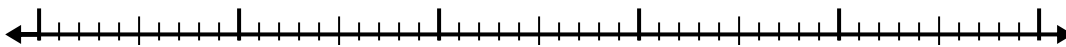
1. _____

2) $4.9 - 1.4 =$



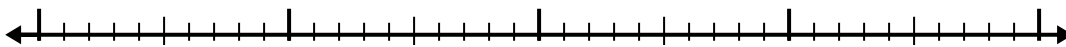
2. _____

3) $11 - 2.5 =$



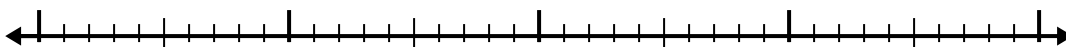
3. _____

4) $4.4 - 2.8 =$




4. _____

5) $7.7 - 1.1 =$



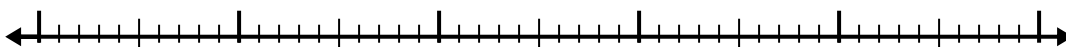
5. _____

6) $5.8 - 3.6 =$




6. _____

7) $7.7 - 3.6 =$



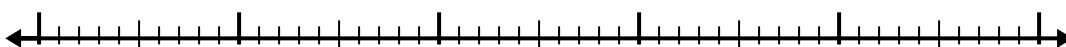
7. _____

8) $4.6 - 3.3 =$



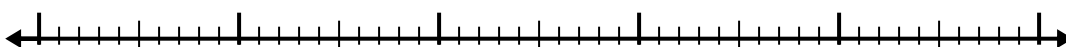
8. _____

9) $4.4 - 3.1 =$



9. _____

10) $7.9 - 3.3 =$

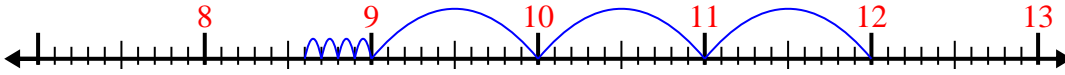


10. _____

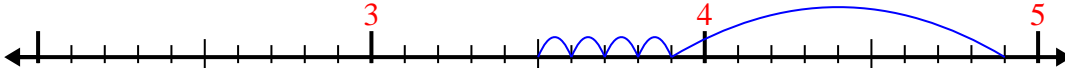


Use the number line to solve each problem.

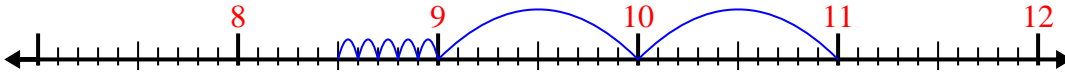
1) $12 - 3.4 =$



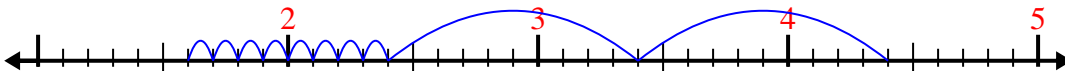
2) $4.9 - 1.4 =$



3) $11 - 2.5 =$



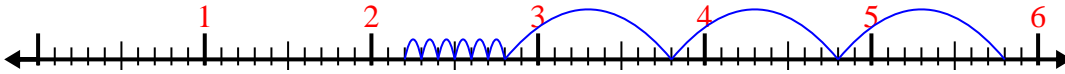
4) $4.4 - 2.8 =$



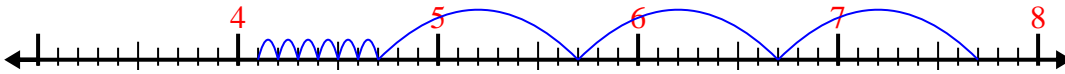
5) $7.7 - 1.1 =$



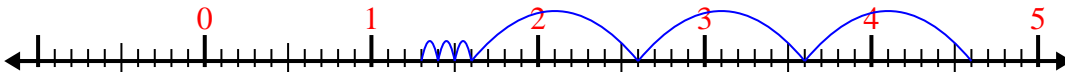
6) $5.8 - 3.6 =$



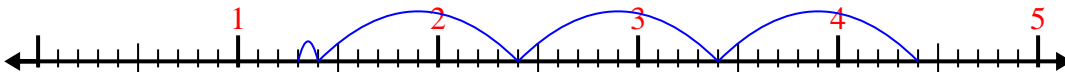
7) $7.7 - 3.6 =$



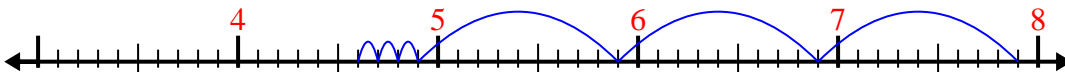
8) $4.6 - 3.3 =$



9) $4.4 - 3.1 =$



10) $7.9 - 3.3 =$

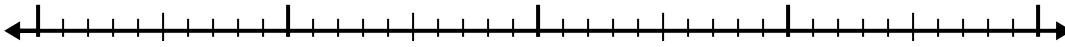
Answers1. 8.62. 3.53. 8.54. 1.65. 6.66. 2.27. 4.18. 1.39. 1.310. 4.6



Use the number line to solve each problem.


Answers

1) $3.4 - 1.4 =$



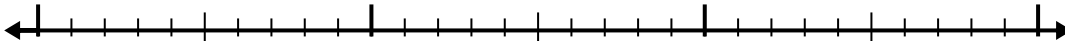
1. _____

2) $7 - 3.2 =$



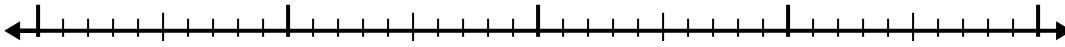
2. _____

3) $3.7 - 1.4 =$



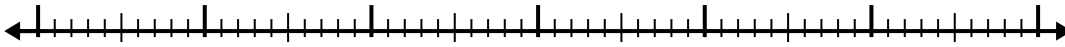
3. _____

4) $6.5 - 2.8 =$



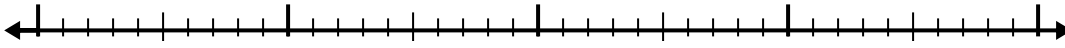
4. _____

5) $11.9 - 3.7 =$



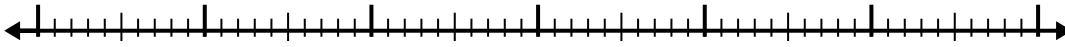
5. _____

6) $3.1 - 1.3 =$



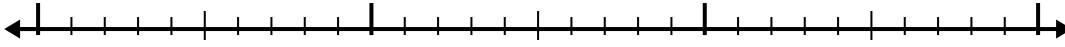
6. _____

7) $12.5 - 3.7 =$



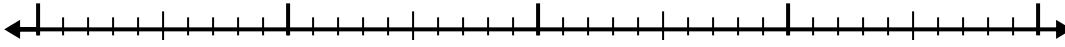
7. _____

8) $6.5 - 1.4 =$



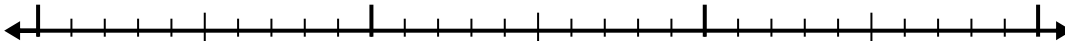
8. _____

9) $7.8 - 2.3 =$



9. _____

10) $6.9 - 1.9 =$

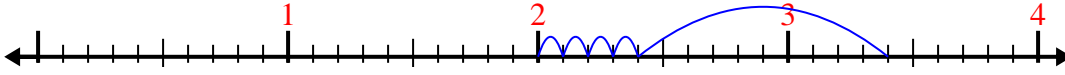


10. _____

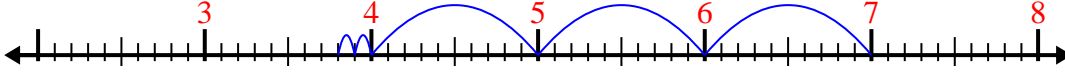


Use the number line to solve each problem.

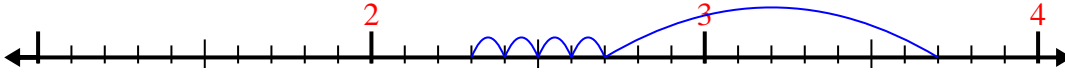
1) $3.4 - 1.4 =$



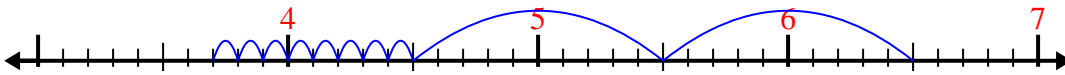
2) $7 - 3.2 =$



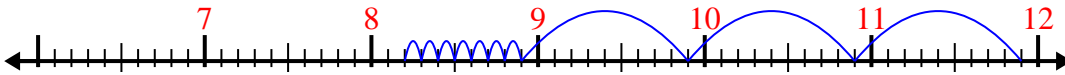
3) $3.7 - 1.4 =$



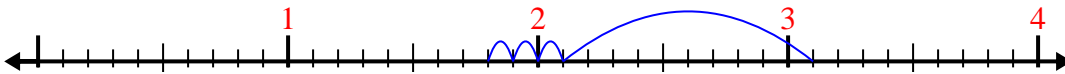
4) $6.5 - 2.8 =$



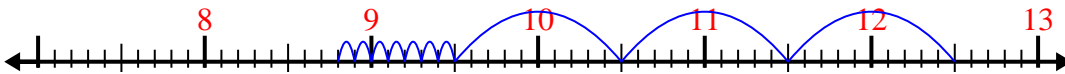
5) $11.9 - 3.7 =$



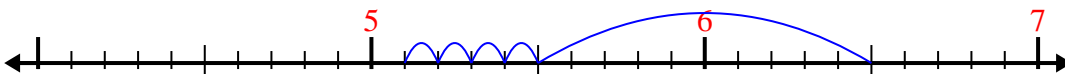
6) $3.1 - 1.3 =$



7) $12.5 - 3.7 =$



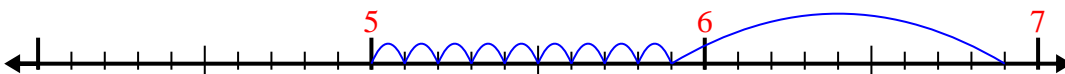
8) $6.5 - 1.4 =$



9) $7.8 - 2.3 =$



10) $6.9 - 1.9 =$



Answers

1. 2

2. 3.8

3. 2.3

4. 3.7

5. 8.2

6. 1.8

7. 8.8

8. 5.1

9. 5.5

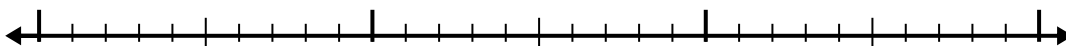
10. 5



Use the number line to solve each problem.

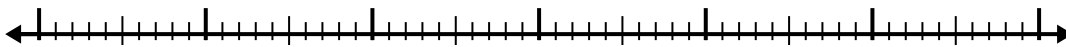
Answers

1) $4 - 1.1 =$



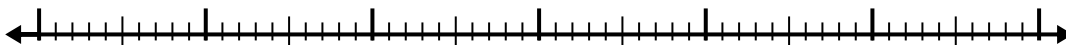
1. _____

2) $9.6 - 3.5 =$




2. _____

3) $11.9 - 3.4 =$



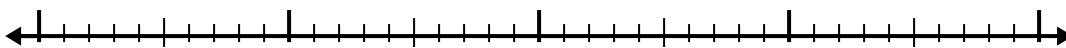
3. _____

4) $11.1 - 3.1 =$




4. _____

5) $9.1 - 1.5 =$




5. _____

6) $7.6 - 2.4 =$



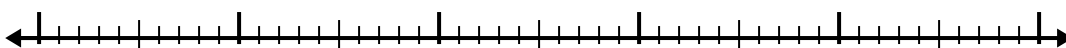
6. _____

7) $7.7 - 1.3 =$



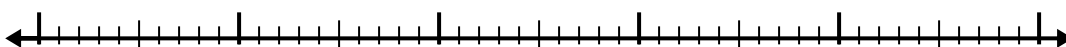
7. _____

8) $8.5 - 2.5 =$



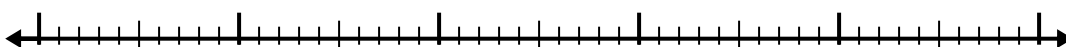
8. _____

9) $7.8 - 2.9 =$



9. _____

10) $11 - 3.8 =$

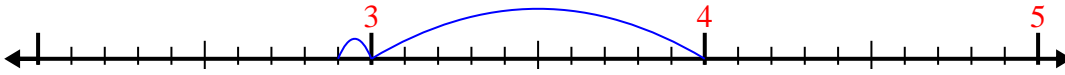


10. _____

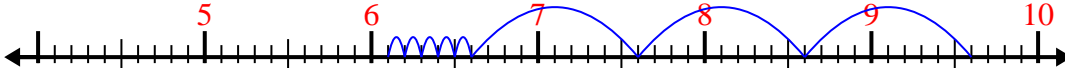


Use the number line to solve each problem.

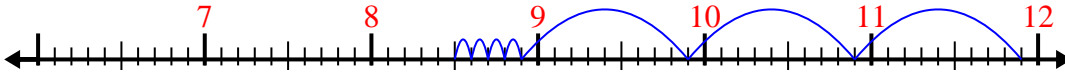
1) $4 - 1.1 =$



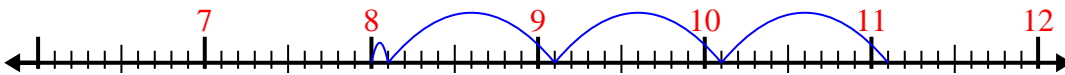
2) $9.6 - 3.5 =$



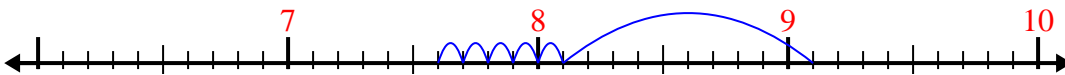
3) $11.9 - 3.4 =$



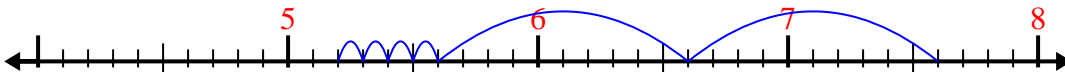
4) $11.1 - 3.1 =$



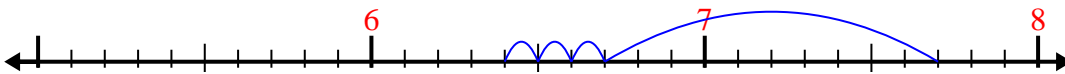
5) $9.1 - 1.5 =$



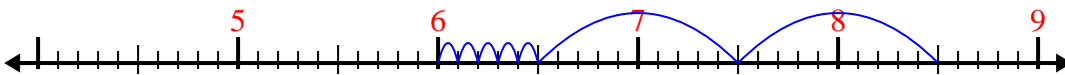
6) $7.6 - 2.4 =$



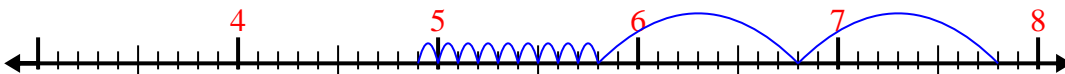
7) $7.7 - 1.3 =$



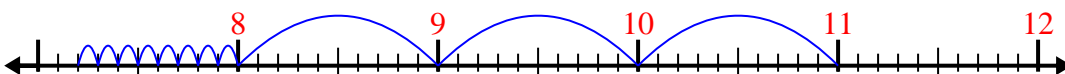
8) $8.5 - 2.5 =$



9) $7.8 - 2.9 =$



10) $11 - 3.8 =$



Answers

1. 2.9

2. 6.1

3. 8.5

4. 8

5. 7.6

6. 5.2

7. 6.4

8. 6

9. 4.9

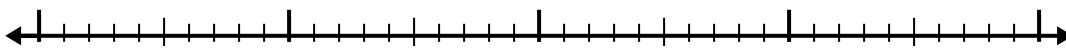
10. 7.2



Use the number line to solve each problem.

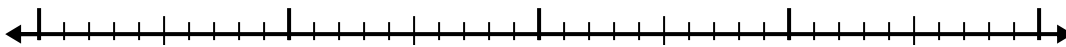
Answers

1) $8.3 - 2.2 =$



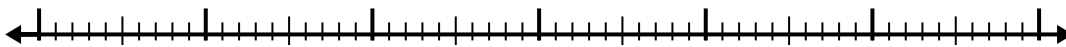
1. _____

2) $3.2 - 2.1 =$



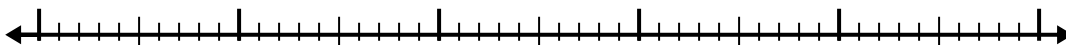
2. _____

3) $11.1 - 3.3 =$



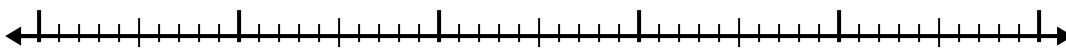
3. _____

4) $8.5 - 3.2 =$



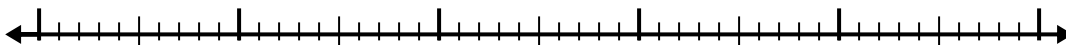
4. _____

5) $4.6 - 2.9 =$



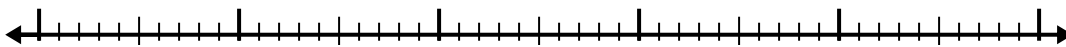
5. _____

6) $8.6 - 3.4 =$



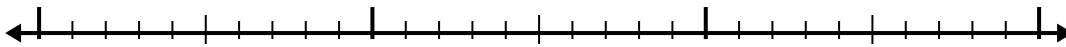
6. _____

7) $7.7 - 2.2 =$



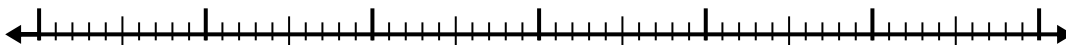
7. _____

8) $5.3 - 1.5 =$



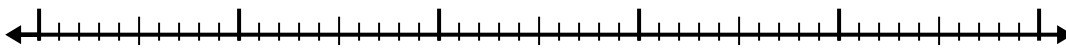
8. _____

9) $9 - 3.7 =$



9. _____

10) $10.7 - 2.7 =$

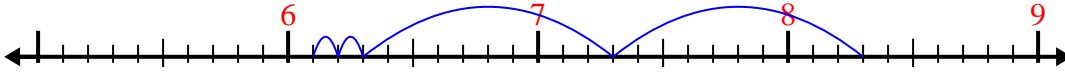


10. _____

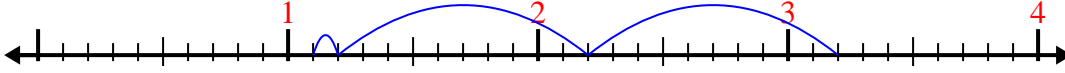


Use the number line to solve each problem.

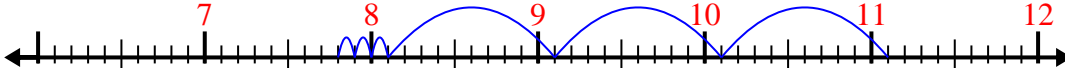
1) $8.3 - 2.2 =$



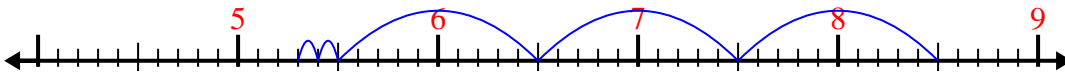
2) $3.2 - 2.1 =$



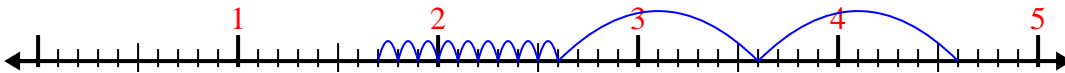
3) $11.1 - 3.3 =$



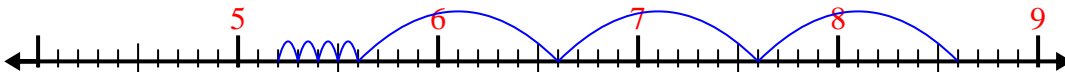
4) $8.5 - 3.2 =$



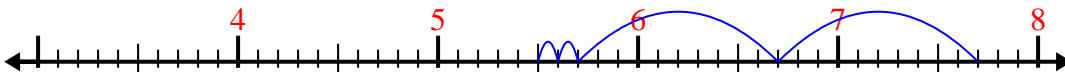
5) $4.6 - 2.9 =$




6) $8.6 - 3.4 =$



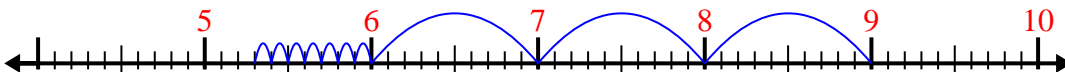
7) $7.7 - 2.2 =$



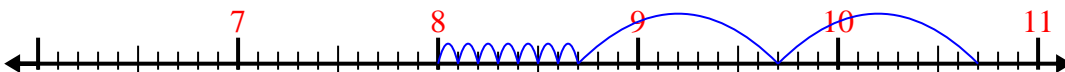
8) $5.3 - 1.5 =$



9) $9 - 3.7 =$



10) $10.7 - 2.7 =$



Answers

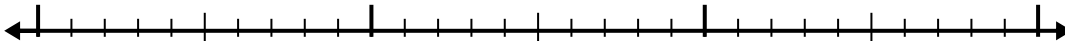
1. 6.1
2. 1.1
3. 7.8
4. 5.3
5. 1.7
6. 5.2
7. 5.5
8. 3.8
9. 5.3
10. 8



Use the number line to solve each problem.

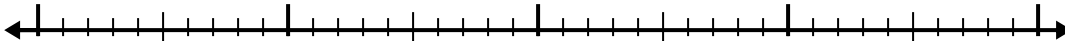
Answers

1) $5.7 - 1.5 =$



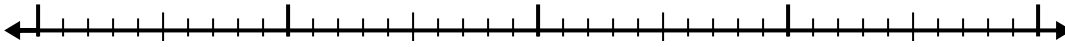
1. _____

2) $6.2 - 1.5 =$



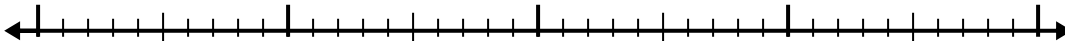
2. _____

3) $7.9 - 1.8 =$



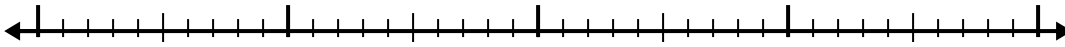
3. _____

4) $11.2 - 2.9 =$



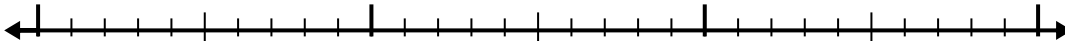
4. _____

5) $4.2 - 1.1 =$



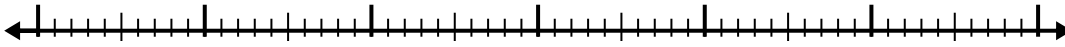
5. _____

6) $10.1 - 1.4 =$



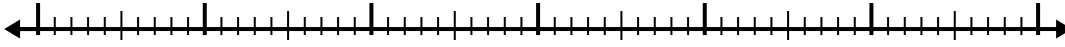
6. _____

7) $6 - 3.1 =$



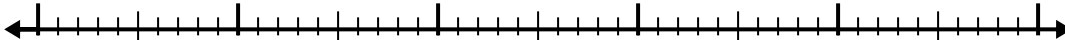
7. _____

8) $4.9 - 3.8 =$



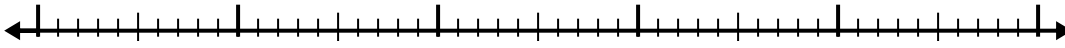
8. _____

9) $9 - 3.5 =$



9. _____

10) $9.4 - 3.4 =$

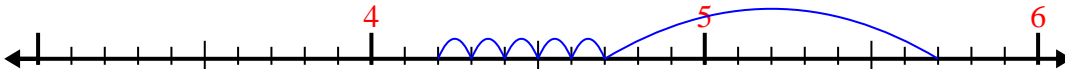


10. _____

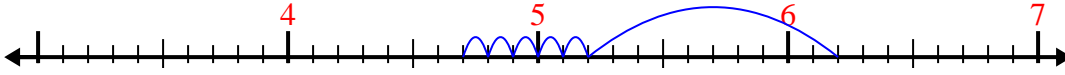


Use the number line to solve each problem.

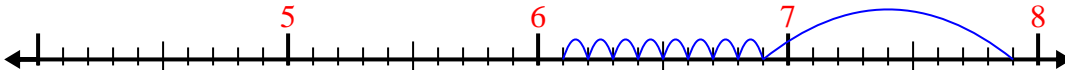
1) $5.7 - 1.5 =$



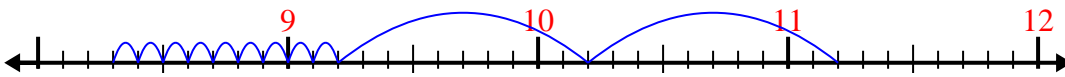
2) $6.2 - 1.5 =$



3) $7.9 - 1.8 =$




4) $11.2 - 2.9 =$



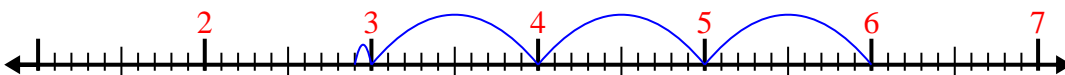
5) $4.2 - 1.1 =$



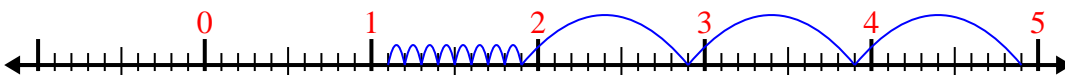
6) $10.1 - 1.4 =$



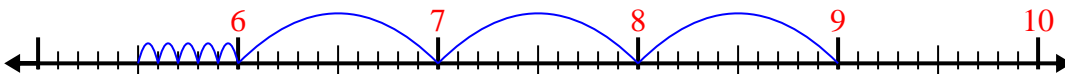
7) $6 - 3.1 =$



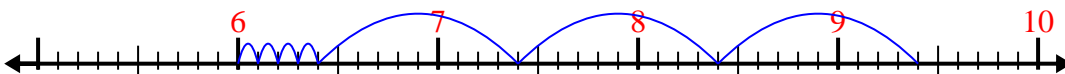
8) $4.9 - 3.8 =$



9) $9 - 3.5 =$



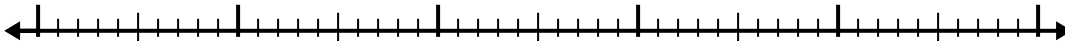
10) $9.4 - 3.4 =$

Answers1. 4.22. 4.73. 6.14. 8.35. 3.16. 8.77. 2.98. 1.19. 5.510. 6

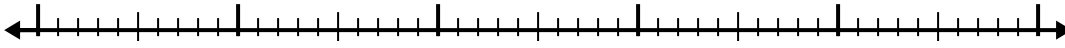


Use the number line to solve each problem.

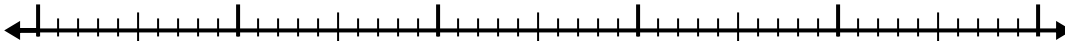
1) $3.8 - 2.7 =$



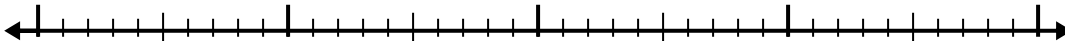
2) $6.3 - 2.7 =$



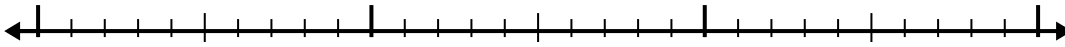
3) $4.7 - 3.6 =$



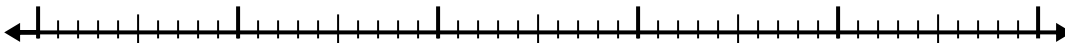
4) $9.9 - 1.1 =$




5) $6 - 1.4 =$



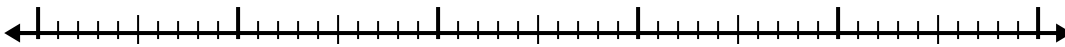
6) $6.2 - 3.9 =$




7) $7 - 3.6 =$




8) $11.4 - 3.6 =$



9) $8 - 3.9 =$



10) $9.4 - 3.4 =$



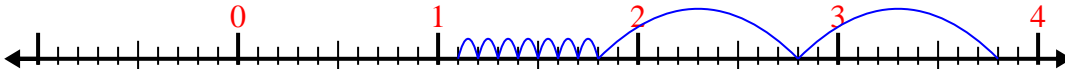
Answers

1. _____
2. _____
3. _____
4. _____
5. _____
6. _____
7. _____
8. _____
9. _____
10. _____

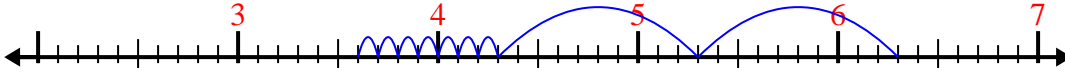


Use the number line to solve each problem.

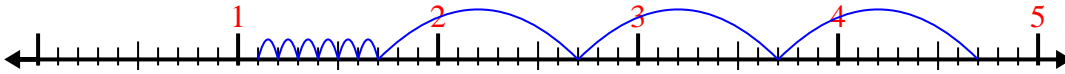
1) $3.8 - 2.7 =$



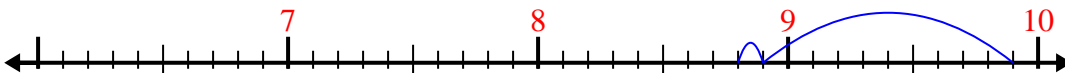
2) $6.3 - 2.7 =$



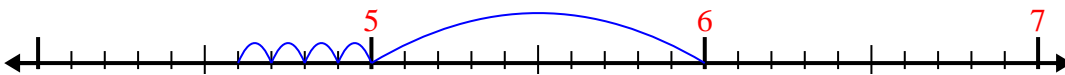
3) $4.7 - 3.6 =$



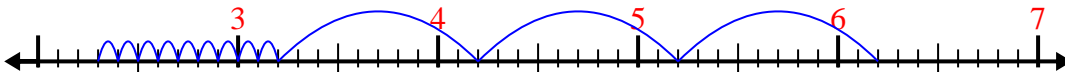
4) $9.9 - 1.1 =$



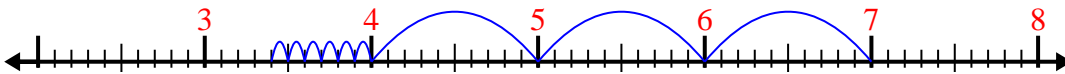
5) $6 - 1.4 =$



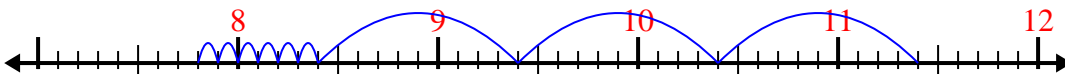
6) $6.2 - 3.9 =$



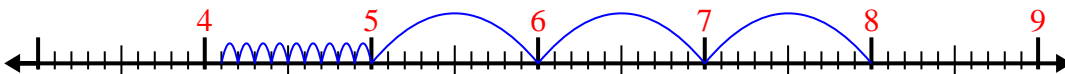
7) $7 - 3.6 =$



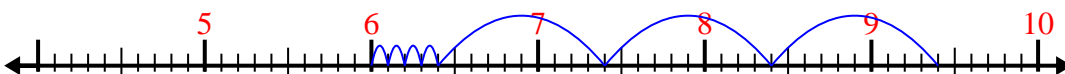
8) $11.4 - 3.6 =$



9) $8 - 3.9 =$



10) $9.4 - 3.4 =$



Answers

1. 1.1

2. 3.6

3. 1.1

4. 8.8

5. 4.6

6. 2.3

7. 3.4

8. 7.8

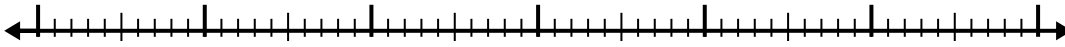
9. 4.1

10. 6

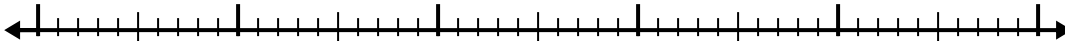


Use the number line to solve each problem.

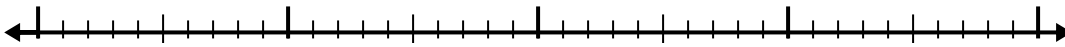
1) $8.1 - 3.6 =$



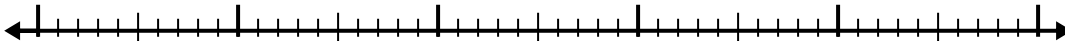
2) $8.8 - 2.3 =$



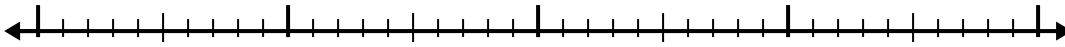
3) $10.1 - 1.6 =$



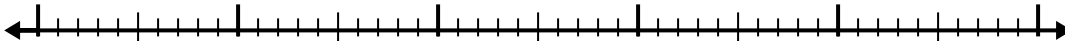
4) $5.9 - 3.4 =$



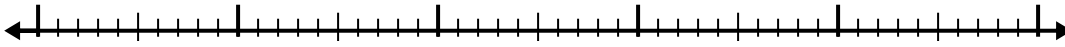
5) $3.8 - 1.8 =$



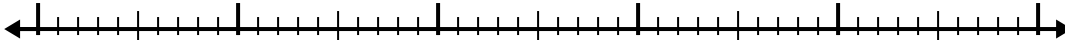
6) $5.5 - 2.7 =$



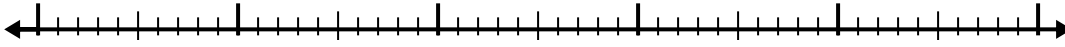
7) $10.4 - 3.7 =$



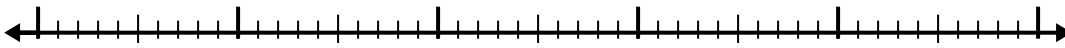
8) $4.8 - 2.3 =$



9) $8.8 - 3.8 =$



10) $12.4 - 3.6 =$



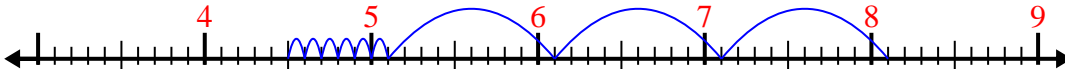
Answers

- 1. _____
- 2. _____
- 3. _____
- 4. _____
- 5. _____
- 6. _____
- 7. _____
- 8. _____
- 9. _____
- 10. _____

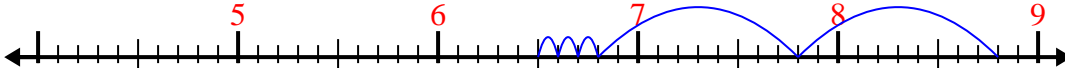


Use the number line to solve each problem.

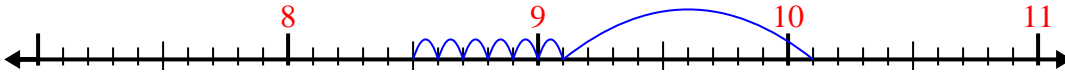
1) $8.1 - 3.6 =$



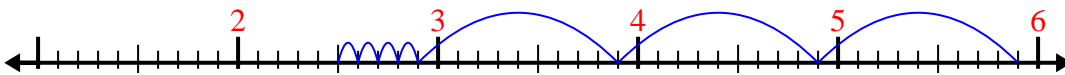
2) $8.8 - 2.3 =$



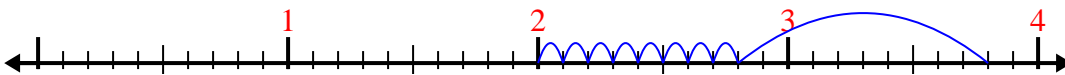
3) $10.1 - 1.6 =$



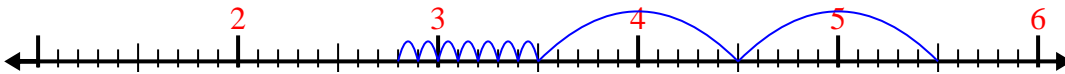
4) $5.9 - 3.4 =$



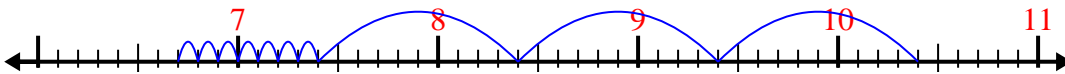
5) $3.8 - 1.8 =$



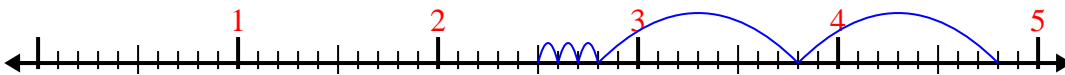
6) $5.5 - 2.7 =$




7) $10.4 - 3.7 =$



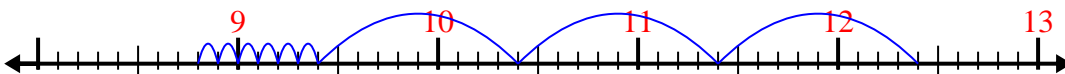
8) $4.8 - 2.3 =$



9) $8.8 - 3.8 =$



10) $12.4 - 3.6 =$



Answers

1. 4.5

2. 6.5

3. 8.5

4. 2.5

5. 2

6. 2.8

7. 6.7

8. 2.5

9. 5

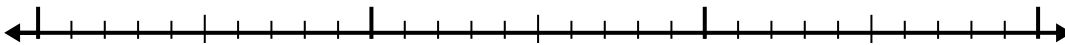
10. 8.8



Use the number line to solve each problem.

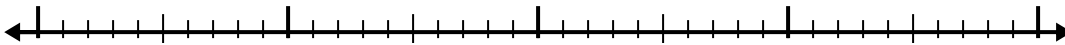
Answers

1) $5 - 1.9 =$



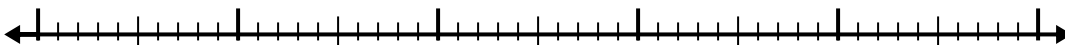
1. _____

2) $3.3 - 2.2 =$



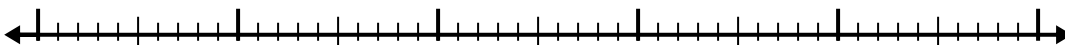
2. _____

3) $11.5 - 3.5 =$



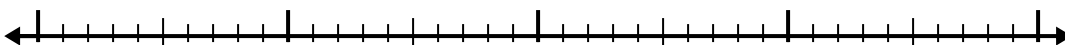
3. _____

4) $7.7 - 2.6 =$




4. _____

5) $3.2 - 1.1 =$



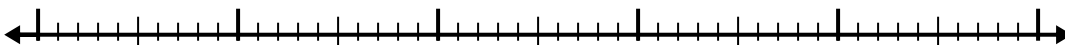
5. _____

6) $10.7 - 3.7 =$



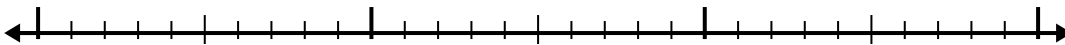
6. _____

7) $3.6 - 2.1 =$



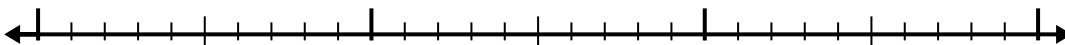
7. _____

8) $9.9 - 1.8 =$



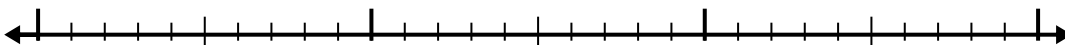
8. _____

9) $3.7 - 1.8 =$



9. _____

10) $10 - 1.8 =$

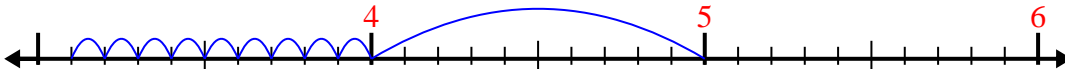


10. _____

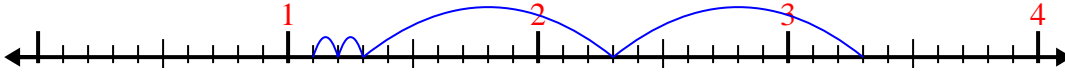


Use the number line to solve each problem.

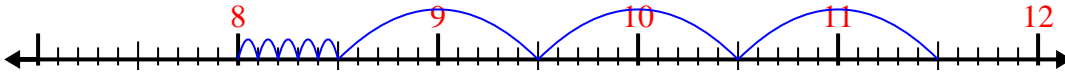
1) $5 - 1.9 =$



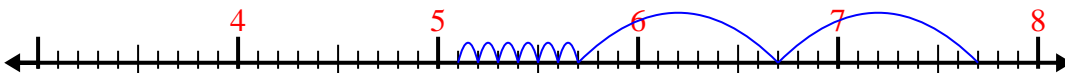
2) $3.3 - 2.2 =$



3) $11.5 - 3.5 =$



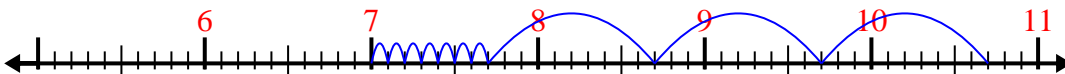
4) $7.7 - 2.6 =$




5) $3.2 - 1.1 =$



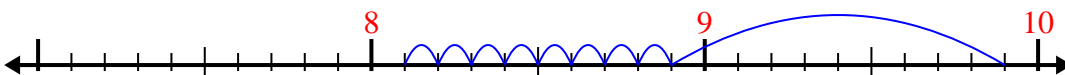
6) $10.7 - 3.7 =$



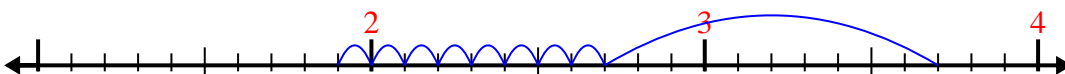
7) $3.6 - 2.1 =$



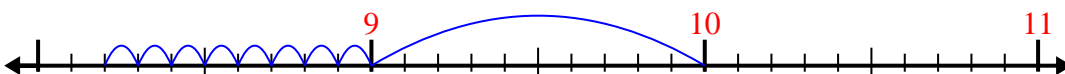
8) $9.9 - 1.8 =$



9) $3.7 - 1.8 =$



10) $10 - 1.8 =$



Answers

1. 3.1

2. 1.1

3. 8

4. 5.1

5. 2.1

6. 7

7. 1.5

8. 8.1

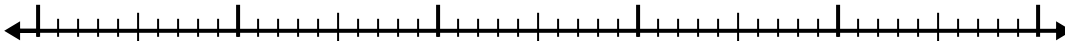
9. 1.9

10. 8.2




Use the number line to solve each problem.

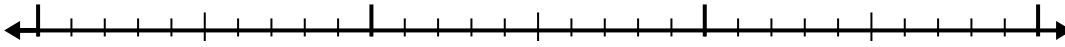
1) $7.1 - 3.4 =$



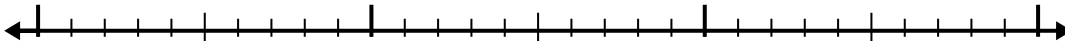
2) $7.2 - 3.9 =$



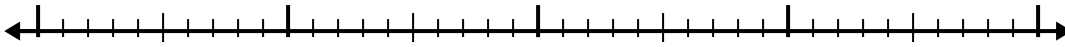
3) $9.5 - 1.9 =$



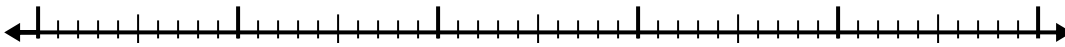
4) $8.8 - 1.4 =$




5) $5.3 - 1.8 =$



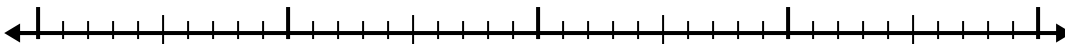
6) $8 - 2.5 =$



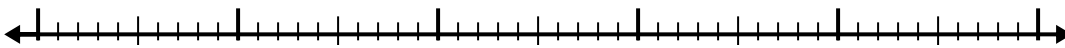
7) $6.1 - 3.4 =$



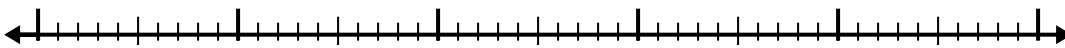
8) $11.1 - 2.8 =$



9) $7.3 - 2.8 =$



10) $9.6 - 2.8 =$



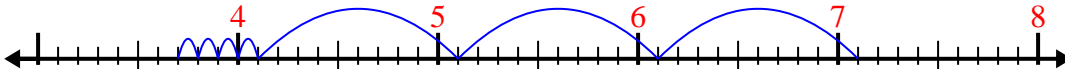
Answers

1. _____
2. _____
3. _____
4. _____
5. _____
6. _____
7. _____
8. _____
9. _____
10. _____

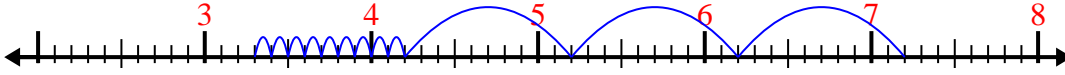


Use the number line to solve each problem.

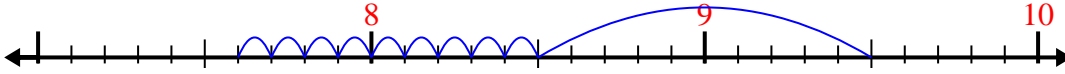
1) $7.1 - 3.4 =$



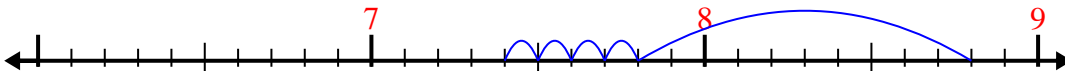
2) $7.2 - 3.9 =$



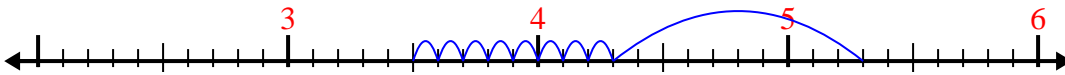
3) $9.5 - 1.9 =$



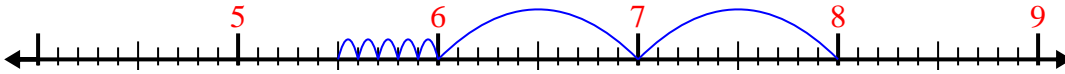
4) $8.8 - 1.4 =$



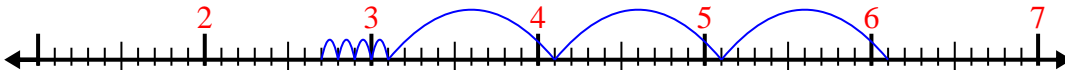
5) $5.3 - 1.8 =$



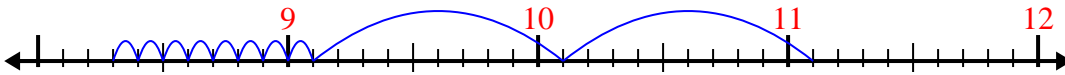
6) $8 - 2.5 =$



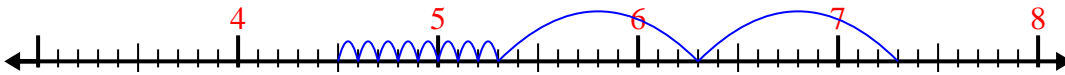
7) $6.1 - 3.4 =$



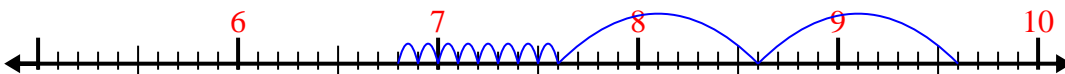
8) $11.1 - 2.8 =$



9) $7.3 - 2.8 =$



10) $9.6 - 2.8 =$



Answers

1. 3.7

2. 3.3

3. 7.6

4. 7.4

5. 3.5

6. 5.5

7. 2.7

8. 8.3

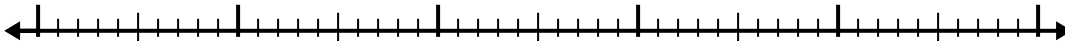
9. 4.5

10. 6.8

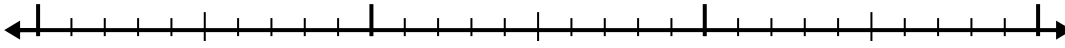


Use the number line to solve each problem.

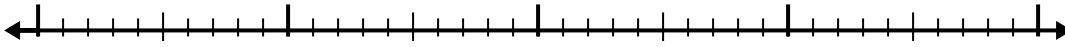
1) $5.8 - 2.8 =$



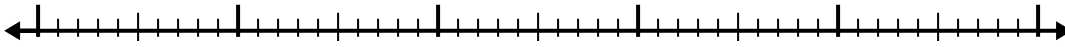
2) $5.3 - 1.5 =$



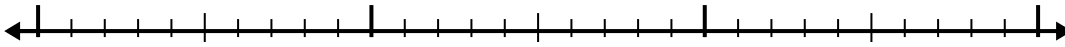
3) $6.4 - 2.7 =$



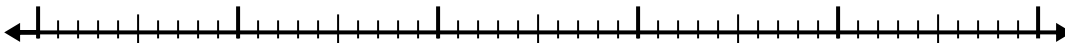
4) $6.8 - 2.6 =$



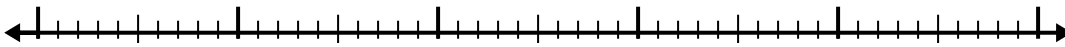
5) $4.8 - 1.8 =$



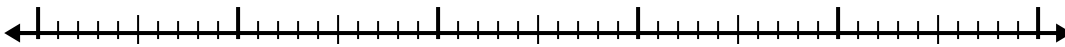
6) $6 - 2.8 =$



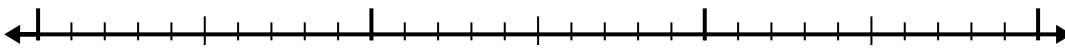
7) $11.3 - 2.4 =$



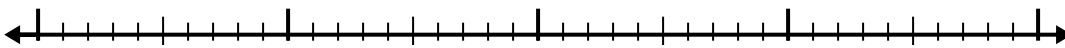
8) $11 - 3.2 =$



9) $7.1 - 1.5 =$



10) $7.6 - 1.2 =$



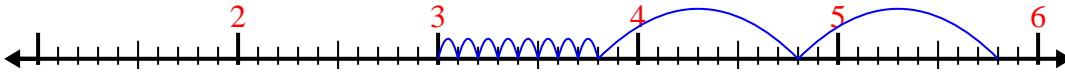
Answers

- 1. _____
- 2. _____
- 3. _____
- 4. _____
- 5. _____
- 6. _____
- 7. _____
- 8. _____
- 9. _____
- 10. _____

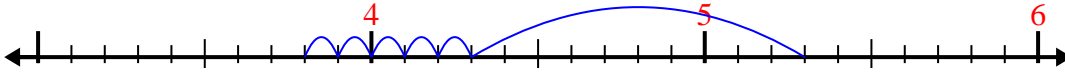


Use the number line to solve each problem.

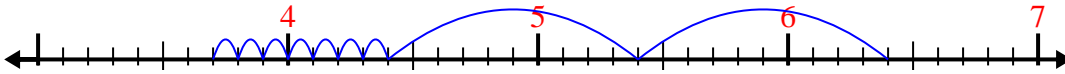
1) $5.8 - 2.8 =$



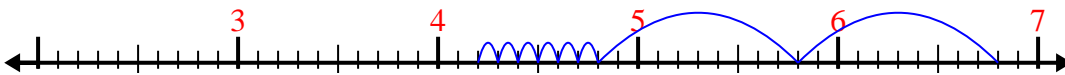
2) $5.3 - 1.5 =$



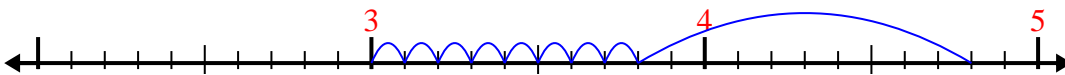
3) $6.4 - 2.7 =$



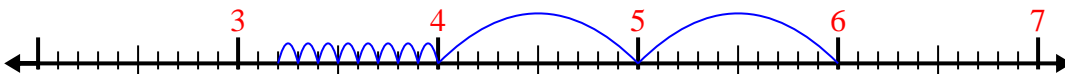
4) $6.8 - 2.6 =$



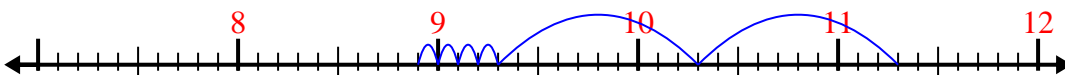
5) $4.8 - 1.8 =$




6) $6 - 2.8 =$




7) $11.3 - 2.4 =$



8) $11 - 3.2 =$



9) $7.1 - 1.5 =$



10) $7.6 - 1.2 =$



Answers

1. 3

2. 3.8

3. 3.7

4. 4.2

5. 3

6. 3.2

7. 8.9

8. 7.8

9. 5.6

10. 6.4